

Day 7 Maths - Decimals

Represent each decimal as a fraction and using
Dienes

1)
0.82




2)
0.23

3)
0.6


4)
0.03

5)
0.38

6)
0.49

Tens	Ones	Tenths	Hundredths
			

Example:

0.15  $\frac{15}{100}$