

Independent Task

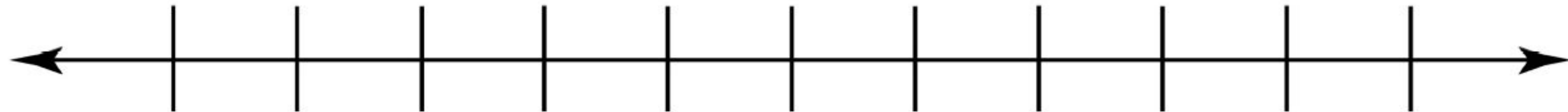
Question 1 and 2

1. Locate the number.
2. Decide which is the nearer multiple of 1000 and write in the answer.

4932 \approx

4000

5000



532 \approx

0

1000

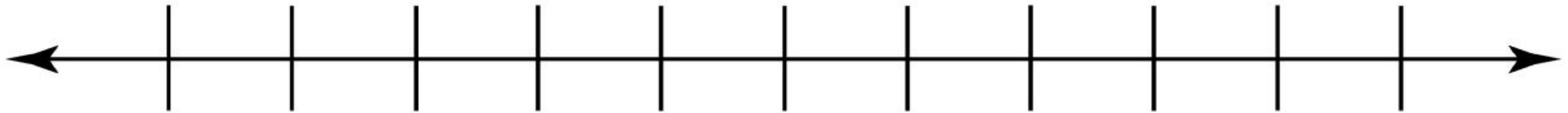


Independent Task

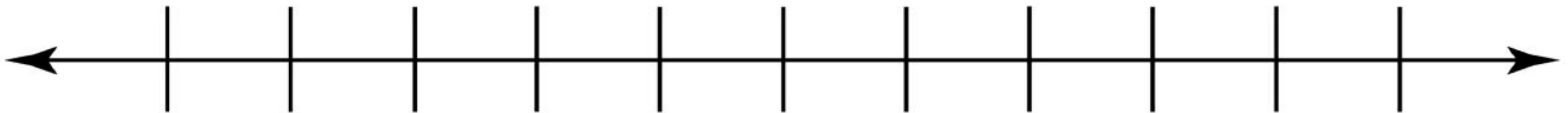
Question 3 and 4

1. Using the number lines, write in the two closest multiples of 1000.
2. Locate the number.
3. Decide which is the nearer multiple of 1000 and write in the answer.

7623 \approx



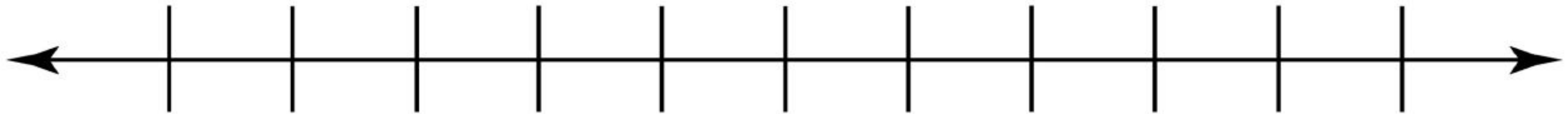
3500 \approx



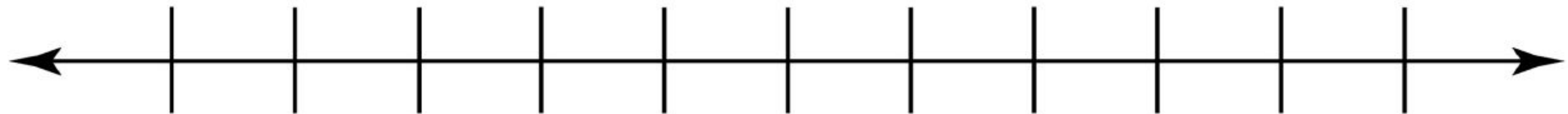
Independent Task

Question 5 and 6

6498 \approx



3009 \approx



1. Using the number lines, write in the two closest multiples of 1000.
2. Locate the number.
3. Decide which is the nearer multiple of 1000 and write in the answer.



Independent Task

Challenge



I have **4** number cards

I add **two** of the numbers together, and round this number to the nearest **1000**.

My answer is **6000**.

Which two cards could I have chosen?

1400	2400
3400	4400

