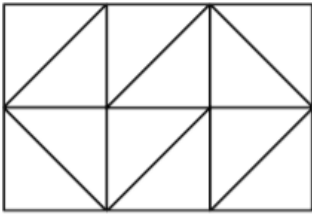


Colour  $\frac{2}{4}$  of these shapes. Put a cross against any that you can't colour  $\frac{2}{4}$  of and explain the reason why.

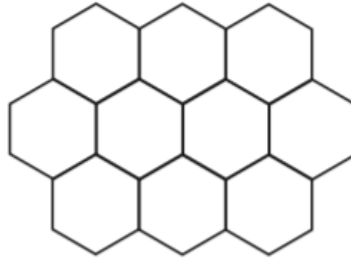



---

---

---

---

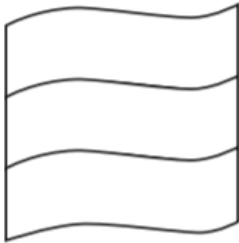



---

---

---

---




---

---

---

---




---

---

How would you explain  $\frac{2}{4}$  to someone?

---

---