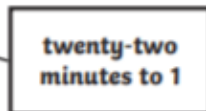
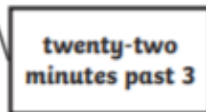
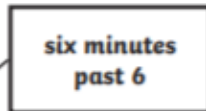




- 1) The minute hand needs to show seventeen minutes past the hour. B is the correct position for the minute hand to show the time seventeen minutes past 5.

2)



- 3) a) Eleven minutes past 8.



- b) Nineteen minutes past nine.