
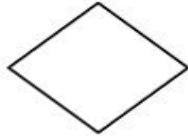
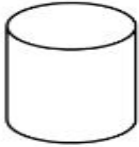

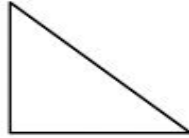
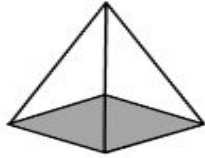
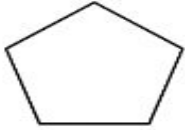
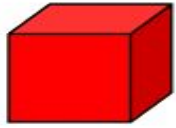


Part A

1. Are these shapes 2-D or 3-D?



Group me -
How many different
ways could you sort
these shapes into
groups?

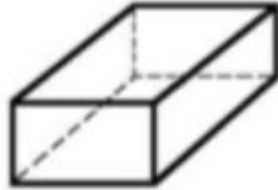
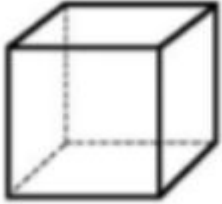
2. True or False?

- A) 2D shapes can only have straight lines?
- B) Squares and rectangles have the same lines of symmetry?
- C) A cone is a 2D shape?



Part B

1. What is the difference between a cube and cuboid?



2. Which 3-D shape has only one circle face?

3. Which 2-D shape is a quadrilateral with 4 right angles and 4 equal sides?

Challenge -

Draw a 2-D shape with 3 sides. How many ways can you do this? What's the same and what's different?

