

3 Times Table Activities

Count in 3s and colour in the grid:

1	2	3	4	5	6
7	8	9	10	11	12
13	14	15	16	17	18
19	20	21	22	23	24
25	26	27	28	29	30
31	32	33	34	35	36

Work out these answers:

a) $4 \times 3 =$ _____

g) $7 \times 3 =$ _____

b) $3 \times 3 =$ _____

h) $1 \times 3 =$ _____

c) $5 \times 3 =$ _____

i) $11 \times 3 =$ _____

d) $2 \times 3 =$ _____

j) $8 \times 3 =$ _____


e) $9 \times 3 =$ _____

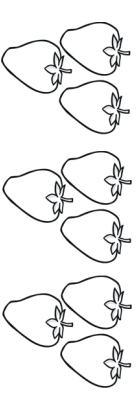
k) $10 \times 3 =$ _____


f) $6 \times 3 =$ _____

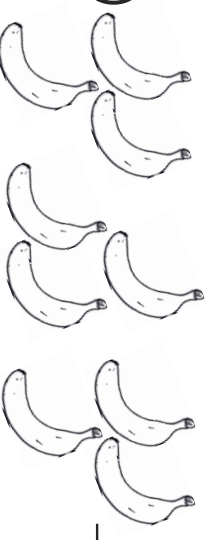
l) $12 \times 3 =$ _____

How many pieces of fruit are there?

a)  _____ \times _____ = _____

b)  _____ \times _____ = _____

c)  _____ \times _____ = _____

d)  _____ \times _____ = _____