










1 Match the coin to the amount.

	20 pence
	5 pence
	10 pence
	1 pound
	1 pence
	50 pence
	2 pence
	2 pounds



2 Here are some coins.



Complete the sentences.

There are 1p coins.

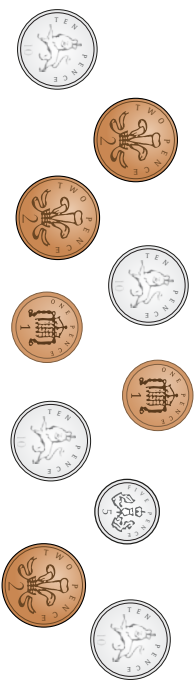
There are 2p coins.

There is 5p coin.

There are 10p coins.

There are 20p coins.

2 Here are some coins.



Complete the sentences.

There are 1p coins.

There are 2p coins.


There is 5p coin.

There are 10p coins.


There are 20p coins.

3 Write < or > to compare the amounts.


a)




b)



c)



d)



4 Mo has one coin in his hand.



I have more than 2 pence,
but less than 1 pound.

Draw Mo's coin.

What is the value of Mo's coin?

Is there more than one answer?