

Part 1

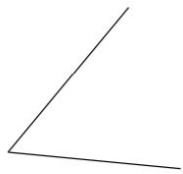
A) Sort the pictures into the correct column based on whether the pairs of lines form an angle. A has been done for you.

Lines do form an angle	Lines don't form an angle
	A

A



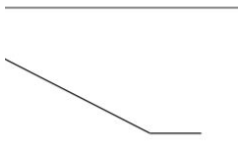
B



C



D



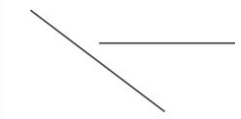
E



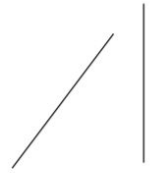
F



G



H



I



Part 2

B) Use the symbols ($>$, $<$ and $=$) to compare the size of the angles.

