

GIVE CHANGE



GET READY



- 1) Ron has these coins. He spends 33p.
How much does he have left?



- 2) What is £1 subtract 50p?
- 3) What is £2 subtract 50p?
- 4) Complete the additions to make £1 each time

$$40\text{p} + \boxed{}\text{p} = \text{£}1$$

$$20\text{p} + \boxed{}\text{p} = \text{£}1$$

$$\boxed{}\text{p} + 25\text{p} = \text{£}1$$

$$\boxed{}\text{p} + 55\text{p} = \text{£}1$$

- 1) Ron has these coins. He spends 33p.
How much does he have left?

£2 and 50p



- 2) What is £1 subtract 50p? 50p
- 3) What is £2 subtract 50p? £1 and 50p
- 4) Complete the additions to make £1 each time

$$40p + \boxed{60} p = \text{£}1$$

$$20p + \boxed{80} p = \text{£}1$$

$$\boxed{75} p + 25p = \text{£}1$$

$$\boxed{45} p + 55p = \text{£}1$$

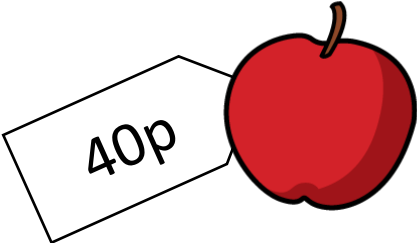
LET'S LEARN



Ron has £1 to spend.

How much change would he have if he bought...

a)



60p change

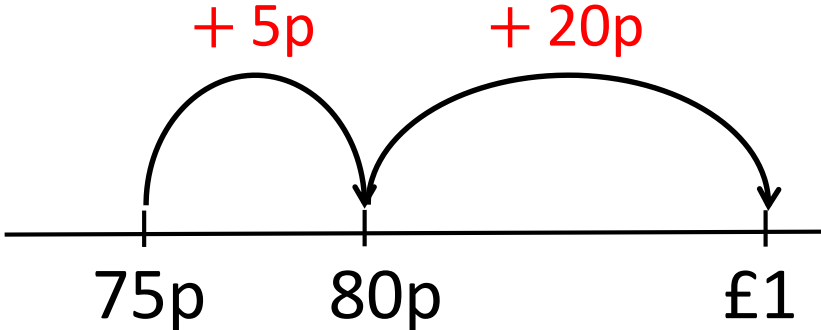


$$£1 - 40p = 60p$$

b)



25p change



Ron has £5 to spend.

How much change would he have if he bought...

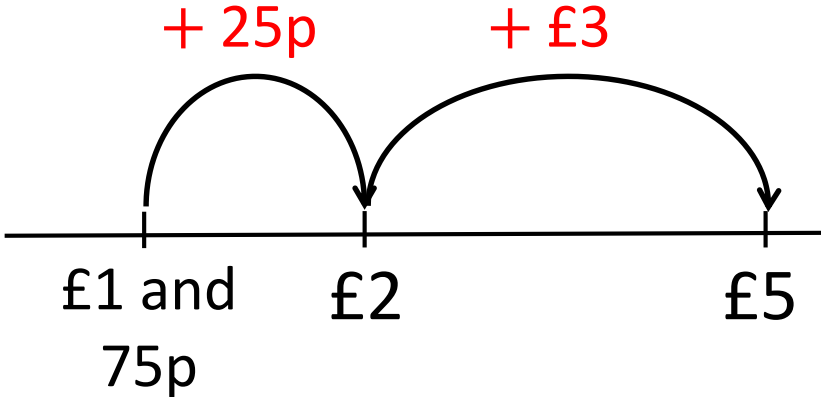
a)



$$£5 - £2 = £3$$

£3 change

b)



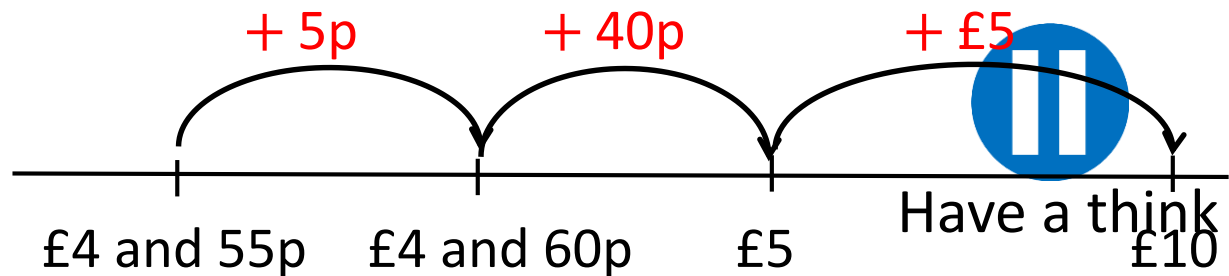
£3 and 25p change

Jack buys a comic costing £4 and 55p. He pays £10
Which set shows the change he receives?

a)  £6 and 45p

b)  £5 and 55p

c)  £5 and 45p



YOUR TURN

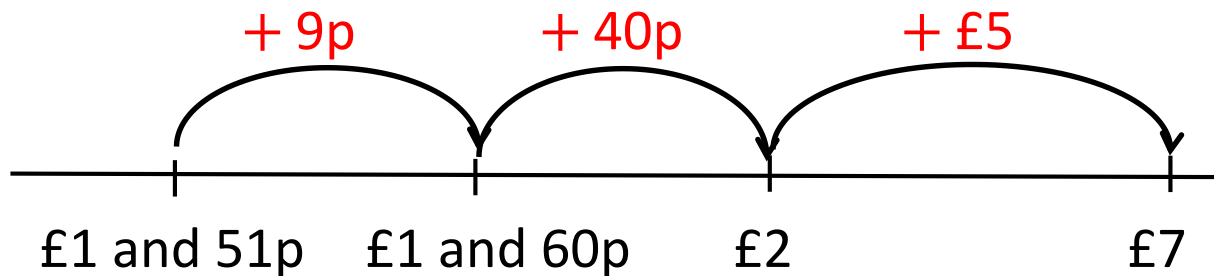
Have a go at questions
1 – 3 on the worksheet



Whitney buys some flowers.
She pays with a £5 note and a £2 coin.
Here is the change she receives.




£7	
?	£1 and 51p
cost of flowers	change



What is the cost of the flowers? £5 and 49p

Eva buys a bucket and spade.
She pays with a £5 note.
She gets 2 identical coins in change.



£4 and 98p



£4 and 96p



£4 and 90p

Have a think



What could the price of the bucket and spade be?
What is the highest possible price?
What is the lowest?



What could the price of the bucket and spade be?
What is the highest possible price?
What is the lowest?

YOUR TURN

Have a go at the rest of
the questions on the
worksheet

