



Question 1:

Where is *Rome located* and what
are its *surrounding countries*?

World Wall Map

2011 @Copyright www.MapsNWorld.com

<https://www.youtube.com/watch?v=gFIS3aLQPfs>



What are
the names of the
continents and
oceans?




Where is
Southampton
located?
What can you
use to help you
remember this?

Where did the
Romans come
from?
Find the country
on the map?





further



Rome is the *capital* city of *Italy* and the centre of the Roman Empire.



How can we remember what Italy looks like?

What *seas* can you see that *surround* Italy?



further

What are the names of the neighbouring countries?



Watch the clip.

What other facts did you find out about Italy from the clip?




How has the modern map changed compared to the Latin map?






Thinking about everything you have learnt about Ancient Rome so far.

Do historians know exactly where the Romans travelled to invade Britain? Why?



Where did the Romans leave from, go through and end up when Julius Caesar reigned?





Caesar made at least two attempts to conquer Britain before the Romans finally succeeded in 43 AD.

One journey was to *Gaul* where he found the *French and British* battling him together and eventually ended up sailing across the *English Channel* and *docked in Kent*.





*Start thinking
about the route
the Romans
might have taken.*



Locate Italy and lightly shade it in green. Put a red dot on Rome, the capital city of Italy.

Locate the UK and lightly shade it in blue. Put a black dot where Southampton is.

Now write the name of the countries surrounding Italy - how many can you find?

Draw the route that Caesar could have travelled onto your map.

