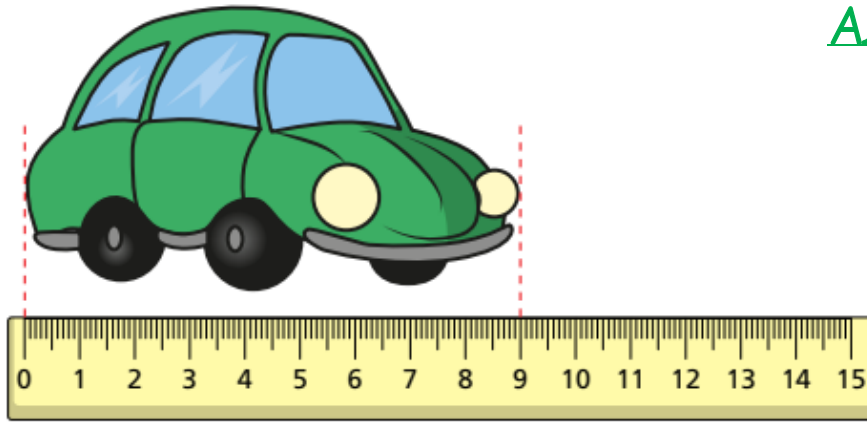


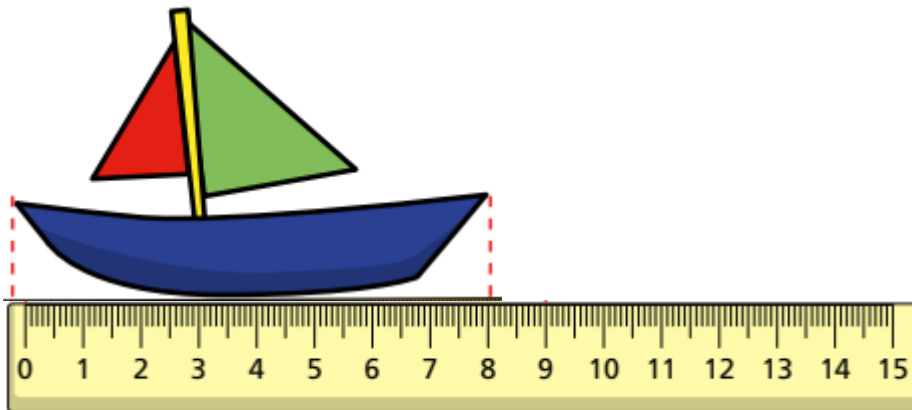
1) a)

Answers



The car is 9 cm long.

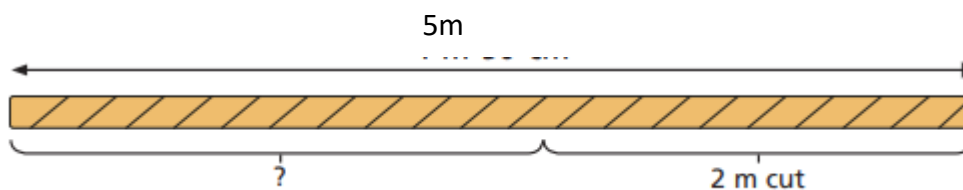
B)



The boat is 8 cm long.

C) How much longer is the car than the boat? 1cm

2) Peter has a length of rope that is 5m. He cuts off 2m. How much rope is left? 3cm



3) Tommy, Rosie and Annie each measure their height.



Annie



Rosie  
100cm



Tommy  
90 cm

a) What is the difference in height between Tommy and Rosie?

10cm

b) Annie is 5 cm shorter than Rosie. What is Annie's height?

95cm

4) Complete these number sentences:

A)  $20\text{cm} - 5\text{cm} = 15\text{cm}$

B)  $29\text{cm} - 6\text{cm} = 23\text{cm}$

C)  $32\text{cm} - 10\text{cm} = 22\text{cm}$

Challenge:  $120\text{mm} - 15\text{mm} = 105\text{mm}$