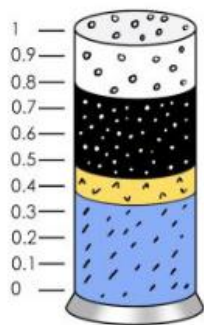


## Spring 1 - Maths Lesson 2

Write the amount of coloured sand as a decimal and as a fraction.

a)



= white sand



= black sand



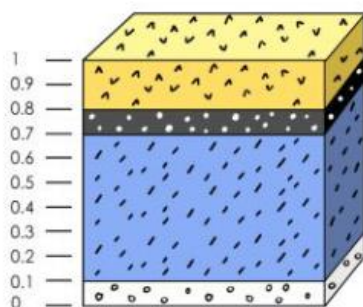
= yellow sand



= blue sand

Write the amount of coloured sand as a decimal and as a fraction.

b)



= white sand



= black sand



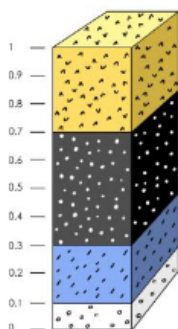
= yellow sand



= blue sand

Write the amount of coloured sand as a decimal and as a fraction.

c)



= white sand



= black sand



= yellow sand



= blue sand