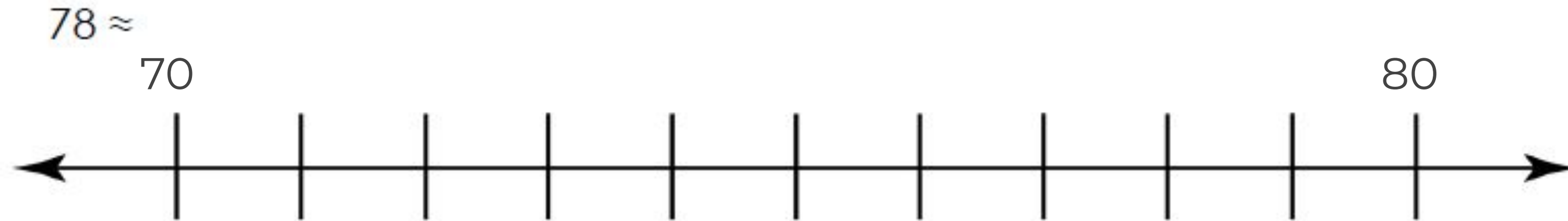


Independent Task

Question 1 and 2

1. Locate the number.
2. Decide which is the nearer multiple of 10 and write in the answer.

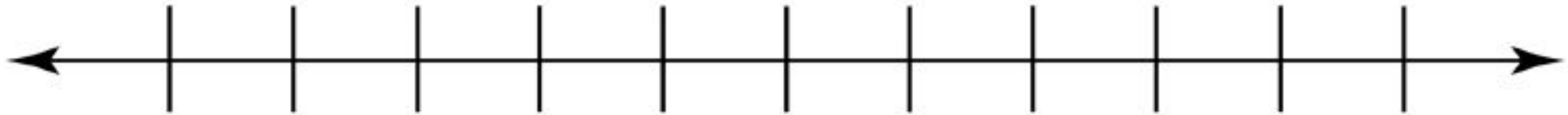


Independent Task

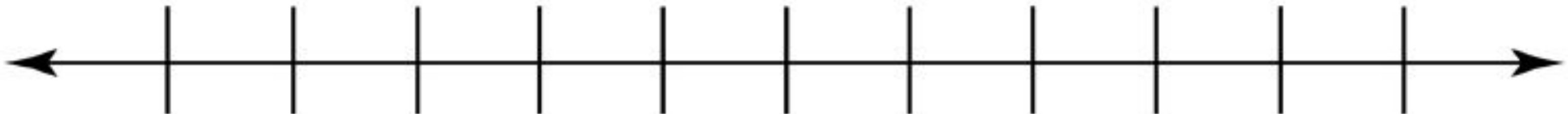
Question 3 and 4

1. Using the number lines, write in the two closest multiples of 10.
2. Locate the number.
3. Decide which is the nearer multiple of 10 and write in the answer.

735 \approx



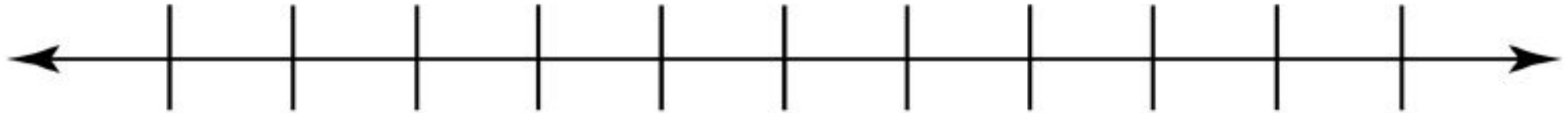
9289 \approx



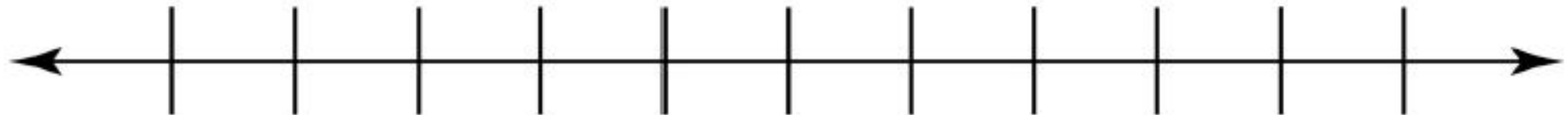
Independent Task

Question 5 and 6

1119 \approx



7656 \approx



1. Using the number lines, write in the two closest multiples of 10.
2. Locate the number.
3. Decide which is the nearer multiple of 10 and write in the answer.



Independent Task

Challenge

I've rounded a number to the nearest 10, my answer is 2830.

What could my number have been?

