

Maths

# **Angles and Shape: To identify perpendicular lines**

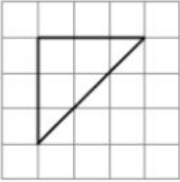
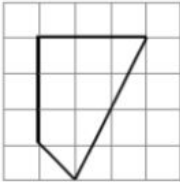

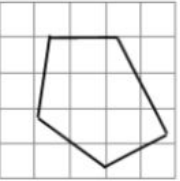
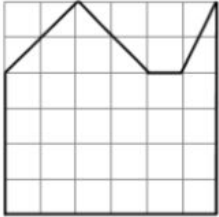
## **Independent Activity**

Miss Brinkworth



# Part A:

## Find the perpendicular lines in these shapes

a 	b 
c 	d 
e This shape has more than one pair of perpendicular lines. Can you find them all? 	

Any 2 straight lines that meet are perpendicular

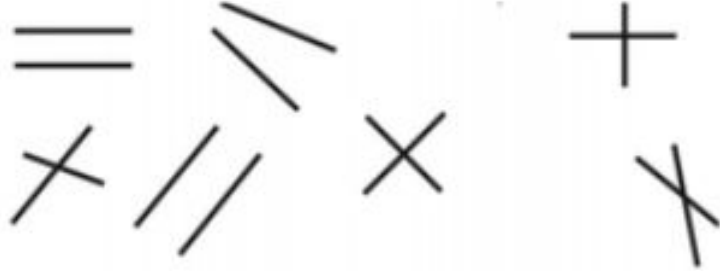
**Do you think this is true or false?**

**Explain...**



## Part B:

1. Which of these lines are perpendicular?



2. Does this shape contain 4 pairs of perpendicular lines? How do you know?

