

What is at these coordinates  
on the pirate map?

(A,7) = mermaid


(A,1) = skull

(E,0) = ship

(I,4) = gold coin


(H,6) = treasure


Write the coordinate of these  
places on the pirate map:

 = ( **D** , **6** )

 = ( **F** , **3** )

 = ( **K** , **7** )

 = ( **B** , **3** )

 = ( **G** , **5** )

Plot these coordinates on  
the grid using a cross.

**(B,1)**

**(C,7)**

**(D,4)**

**(I,1)**

**(K,4)**