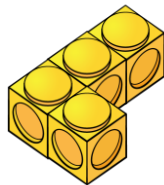


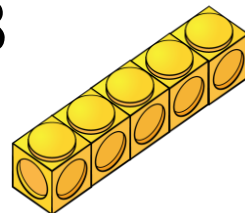
1) How many hundred thousands are there in the number 534,709?

2) Which shape has the greater volume?

A



B



3) What is $\frac{3}{4}$ as a decimal?


4) $6,249 + \boxed{} = 7,000$

XIV

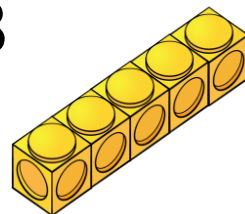
1) How many hundred thousands are there in the number 534,709? **5**

2) Which shape has the greater volume? **B**

A



B



3) What is $\frac{3}{4}$ as a decimal? **0.75**

4) $6,249 + \boxed{751} = 7,000$