

ADD MONEY



GET READY



1) How much money is there?



2) What is £1 more than £5 and 42p?

3) What is £2 more than £5 and 42p?

4) True or false?

$$19 + 6 = 20 + 5$$

1) How much money is there?

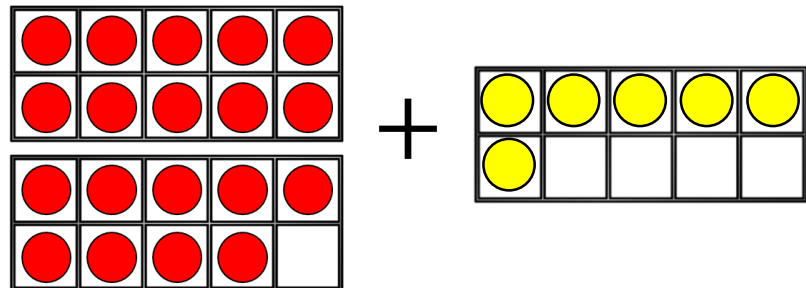


2) What is £1 more than £5 and 42p? £6 and 42p

3) What is £2 more than £5 and 42p? £7 and 42p

4) True or false?

$$19 + 6 = 20 + 5$$



LET'S LEARN



Complete the part-whole model.

£4 and
73p

$$£3 + £1 = £4$$

$$50p + 23p = 73p$$




Complete the part-whole model.

£7 and
50p

$$£2 + £5 = £7$$

$$45p + 5p = 50p$$



Have a think



Whitney buys some apples, pears and bananas.



How much does Whitney spend in total?

$$£1 + £1 + £1 = £3$$



$$25p + 30p + 40p = 95p$$

Whitney spends £3 and 95p

Have a think



Jack is selling some things he no longer needs.



How much does Amir spend?

$$£2 + £3 = £5$$

$$60p + 50p = £1 \text{ and } 10p$$

Amir spends £6 and 10p



Have a think





How much does Ron spend?



$$£2 + £1 = £3$$

$$50p + 90p = £1 \text{ and } 40p$$



Ron spends £4 and 40p


Have a think



YOUR TURN

Have a go at questions
1 - 4 on the worksheet








Have a think




Wait there is
an easier way.

I will find the
total cost.





Rosie you do have
enough money!

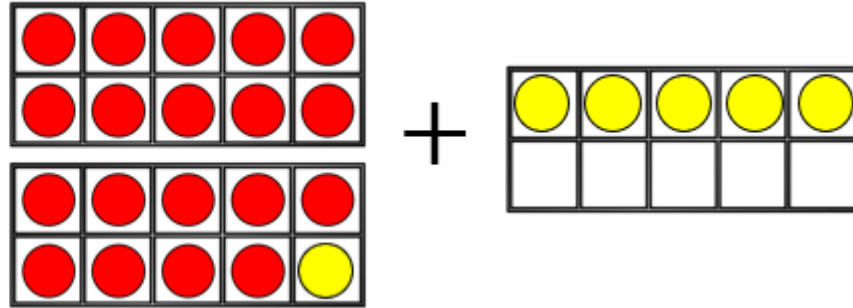


I know a fun way to find the total cost.



True or false?


$$19 + 6 = 20 + 5$$



$$£2 \text{ and } 70\text{p} + £1 \text{ and } 99\text{p} = £4 \text{ and } 69\text{p}$$



$$£2 \text{ and } 69\text{p} + £2 = £4 \text{ and } 69\text{p}$$



I know a fun way to find the total cost.



$$£2 \text{ and } 20\text{p} + £3 \text{ and } 99\text{p} = £6 \text{ and } 19\text{p}$$



$$£2 \text{ and } 19\text{p} + £4 = £6 \text{ and } 19\text{p}$$

Have a think



YOUR TURN

Have a go at the rest of
the questions on the
worksheet

