


Make arrays

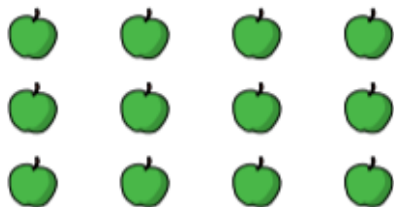
- 1 Circle each row of sweets.



How many rows are there?

There are rows.

- 2 Circle each column of apples.



How many columns are there?

There are columns.



- 3 Make this array.



Complete the sentences.

a) There are counters in each row.

There are rows.

There are counters altogether.

b) There are counters in each column.

There are columns.

There are counters altogether.

Make your own array.

How many rows are there?


How many columns are there?



ANSWERS

Make arrays


1 Circle each row of sweets.



How many rows are there?

There are rows. Rows go along

2 Circle each column of apples.



How many columns are there?

There are columns. Columns go down



3 Make this array. Use things like pasta, toys, or cornflakes if you don't have counters



Complete the sentences.

a) There are counters in each row.

There are rows.

There are counters altogether.

b) There are counters in each column.

There are columns.

There are counters altogether.

Use things like pasta, toys, or cornflakes to make your own array.

How many rows are there?

How many columns are there?

