

1) This whole square has a value of 1.

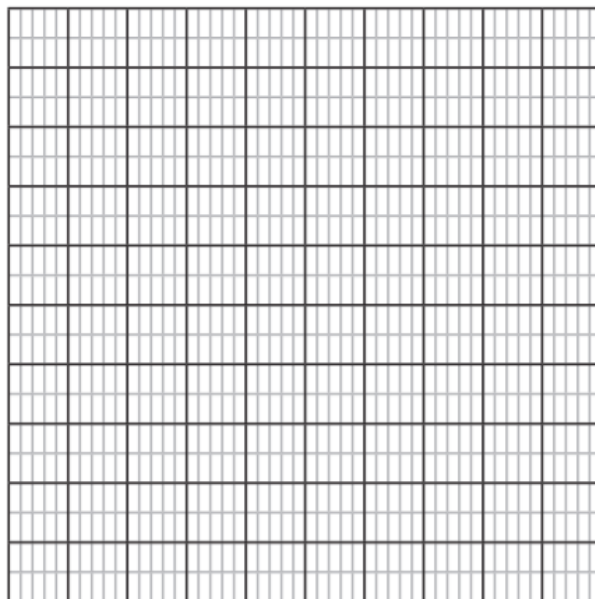
a) Choose 3 different colours and colour in 1 tenth, 1 hundredth and 1 thousandth.

b) Complete the sentences.

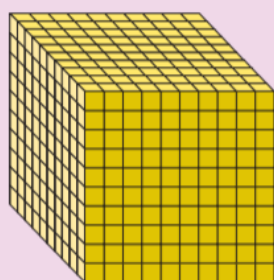
There are \_\_\_\_\_ thousandths in a whole.

There are \_\_\_\_\_ thousandths in a tenth.

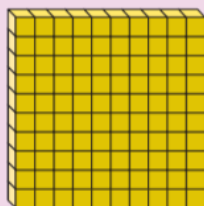
There are \_\_\_\_\_ thousandths in a hundredth.



2) Match each decimal or fraction to the correct base ten representation.



= 1 whole



= 1 tenth



= 1 hundredth



= 1 thousandth

0.124

A

1.056

B

$\frac{37}{1000}$

C

