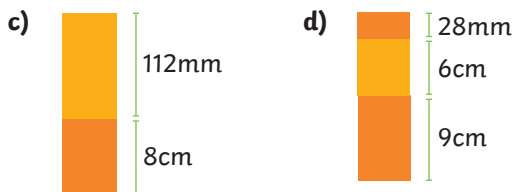
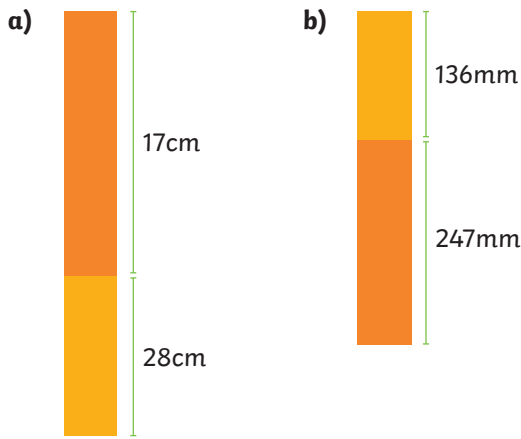


1) Calculate the total height of each tower.




2) Some children took part in a swimming event. The total length of each swim was recorded.

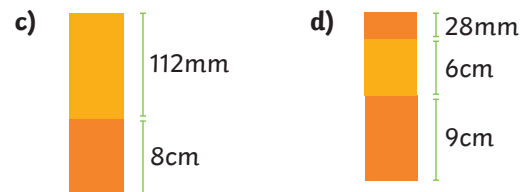
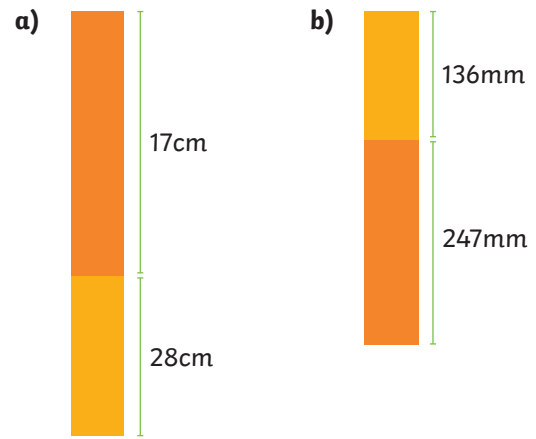
Name	First Swim	Second Swim
Leon	123m	56m
Matthias	84m	96m
Grace	102m	69m
Bella	92m	47m

- How far did each child swim in total?
- Who swam the furthest?
- What was the total distance swum by all four children?

3) What is the total height of the doll?



1) Calculate the total height of each tower.




2) Some children took part in a swimming event. The total length of each swim was recorded.

Name	First Swim	Second Swim
Leon	123m	56m
Matthias	84m	96m
Grace	102m	69m
Bella	92m	47m

- How far did each child swim in total?
- Who swam the furthest?
- What was the total distance swum by all four children?

3) What is the total height of the doll?



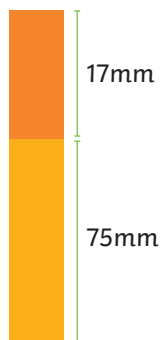
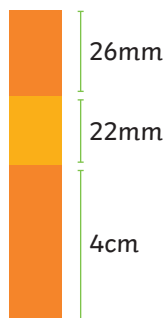
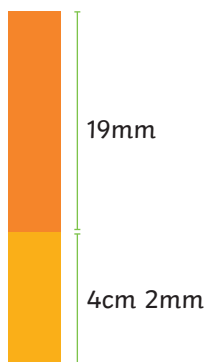
- 1) Work out the height of each tower, to match the tower to its builder.



Tower A

Tower B

Tower C



Grace My tower is the tallest tower.

Polly My tower is less than 7cm tall.

Finn My tower is 88mm tall.

- 2) Zara and Joe have laid two sticks end to end. Zara's stick measures 36cm 7mm. Joe's stick is 129mm long.



The total length is 165cm 7mm.

Do you agree with Joe?
Show your working out and explain your reasons.

twinkl.com

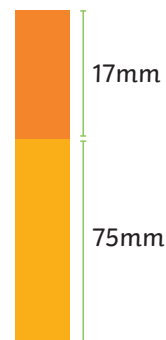
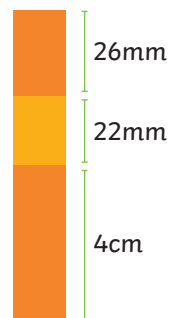
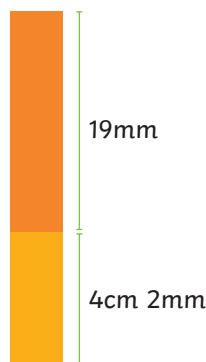
- 1) Work out the height of each tower, to match the tower to its builder.



Tower A

Tower B

Tower C



Grace My tower is the tallest tower.

Polly My tower is less than 7cm tall.

Finn My tower is 88mm tall.

- 2) Zara and Joe have laid two sticks end to end. Zara's stick measures 36cm 7mm. Joe's stick is 129mm long.










The total length is 165cm 7mm.

Do you agree with Joe?
Show your working out and explain your reasons.

twinkl.com

- 1) Jo and Freddie are making sandwiches using different breads, fillings and salad items. They can only use one of each item.



Bread	Filling	Salad
Baguette 3cm 	Ham 2cm 6mm 	Tomato 35mm  Lettuce 19mm  Cucumber 1cm 5mm 
Roll 2cm 5mm 	Chicken 2cm 9mm 	








- a) Which three parts will make the tallest sandwich?
 b) How tall is the tallest sandwich?

- 2) a) Calculate the height of as many different sandwiches as you can, using one type of bread, one filling and one salad item for each sandwich.
 b) Copy and complete the table to sort the heights of the different sandwiches.

Less than 7cm	Between 7cm and 8cm 5mm	More than 8cm 5mm

- 1) Jo and Freddie are making sandwiches using different breads, fillings and salad items. They can only use one of each item.



Bread	Filling	Salad
Baguette 3cm 	Ham 2cm 6mm 	Tomato 35mm  Lettuce 19mm  Cucumber 1cm 5mm 
Roll 2cm 5mm 	Chicken 2cm 9mm 	

- a) Which three parts will make the tallest sandwich?
 b) How tall is the tallest sandwich?

- 2) a) Calculate the height of as many different sandwiches as you can, using one type of bread, one filling and one salad item for each sandwich.
 b) Copy and complete the table to sort the heights of the different sandwiches.

Less than 7cm	Between 7cm and 8cm 5mm	More than 8cm 5mm